

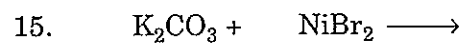
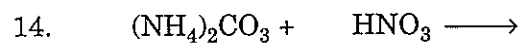
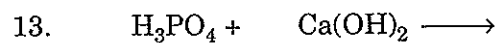
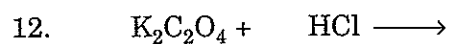
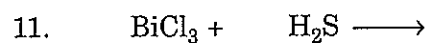
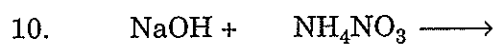
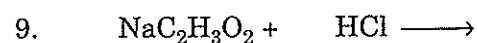
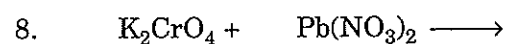
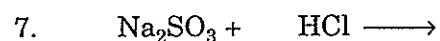

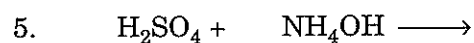
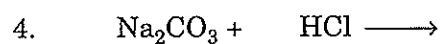
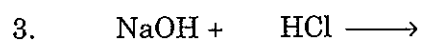
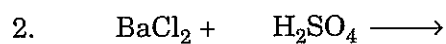
NAME _____

SECTION _____ DATE _____

INSTRUCTOR _____

EXERCISE 7**Equation Writing and Balancing II**

Complete and balance the following double displacement reaction equations (assume all reactions will go):



EXERCISE 7 (continued)

NAME _____

Complete and balance the following equations. (Combination, 1-4; Decomposition, 5-8; Single displacement, 9-12; Double displacement, 13-16.)

